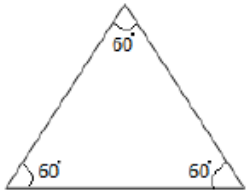



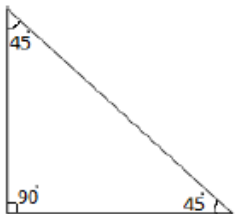
Classify triangles based on angles

Name the triangles based on its angles: (acute or obtuse or right)









Type of Triangle

From the given angles of measures of the triangles, identify the type of triangle.
(Acute or obtuse or right)

Angles	Type of triangle
$30^{\circ}, 60^{\circ}, 90^{\circ}$	
$70^{\circ}, 72^{\circ}, 38^{\circ}$	
$120^{\circ}, 30^{\circ}, 30^{\circ}$	
$105^{\circ}, 60^{\circ}, 65^{\circ}$	
$45^{\circ}, 90^{\circ}, 45^{\circ}$	
$75^{\circ}, 60^{\circ}, 45^{\circ}$	
$50^{\circ}, 80^{\circ}, 50^{\circ}$	