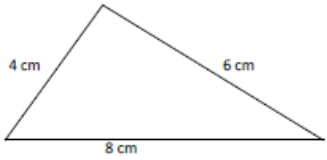
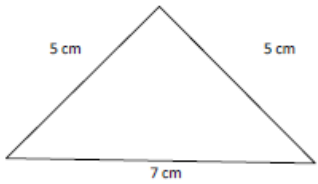
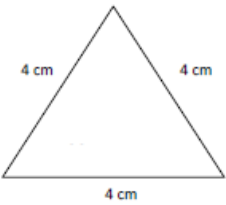


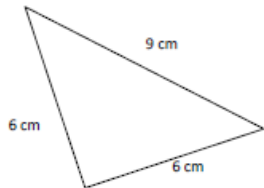
Name by Sides

Name the triangles based on its sides: (equilateral or isosceles or scalene)









Type of Triangle

From the given sides of measures of the triangles, identify the type of triangle.
(Equilateral or isosceles or scalene)

Sides of triangle	Type of triangle
4 cm, 4 cm and 4 cm	
11 in, 7 in and 9 in	
5 m, 8 m and 8 m	
2 m, 5 m and 6 m	
5 cm, 5 in and 5 cm	
18 in, 1 yd and 2 ft	
5 m, 5 m and 5 m	